

"Haidner Happenings"

Daily Newsletter

Mrs. Haidner's Contact Information:

Email: khaidner@scdsb.on.ca

Remind Code @297f6k4

Class Blog: kjhaidner.edublogs.org



Thursday, June 11, 2020.

Good morning grade 2 students and families.

Today is the first day for picking up student items at the school. The schedule is as follows:

Thursday, June 11, 2020:

- Families with the last name starting with A-F come to the school between 8:30 am – 11:30 am.
- Families with the last name starting with G-L come to the school between 11:45 am – 2:45 pm.

Friday, June 12, 2020:

- Families with the last name starting with M-R come to the school between 8:30 am – 11:30 am.
- Families with the last name starting with S-Z come to the school between 11:45 am – 2:45 pm.

I hope you all have a wonderful day.

Mrs. Haidner

Art or STEM Challenge:

Funny Ice Cream



<https://frompond.blogspot.com/2014/05/funny-ice-cream-directed-drawing.html>

Daily Website Review:

Don't forget to look at Mrs. Haidner's Blog (kjhaidner.edublogs.org)

Caracal – Read all about it!

<https://kids.nationalgeographic.com/animals/mammals/caracal/>



Joke of the Day:

Q - What's a pirate's favorite letter?

A - Arrrrrrrrrr



Reading:

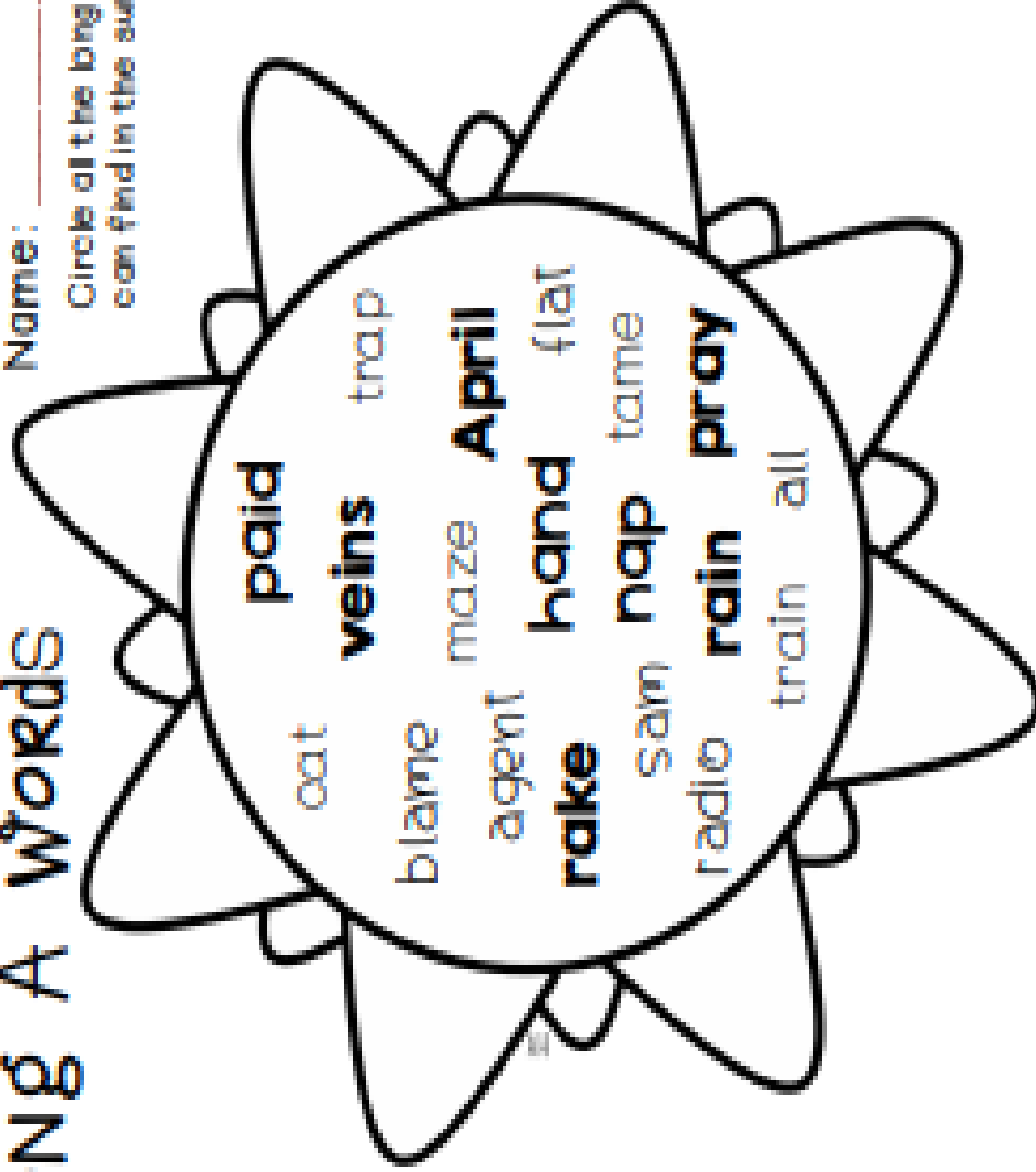
Remember that each day your goal is to read for a minimum of 15 minutes a day. Record your reading on your reading log or on a piece of paper.



Long A Words

Name: _____

Circle all the long a words you can find in the sunshine.














How many long a words did you find?

The Sport Shop

Peter and his friends are at the sport shop getting ready for some summer fun! Figure out how much change they'll have left after they pick their summer sport.

				
Tennis Racket \$1.07	Tennis Ball 27¢	Baseball 36¢	Football 51¢	Hockey Puck 42¢
				
	Soccer Ball 97¢	Baseball Bat \$1.03	Hockey Stick \$1.15	

Peter has \$2.05	Tina has \$1.75	Vince has \$3.00	Lisa has \$4.00
 \$ _____  +\$ _____  +\$ _____ \$ _____	 \$ _____  +\$ _____ \$ _____	 \$ _____  +\$ _____  +\$ _____ \$ _____	 \$ _____  +\$ _____  +\$ _____ \$ _____
\$ _____ -\$ _____ \$ _____ Change	\$ _____ -\$ _____ \$ _____ Change	\$ _____ -\$ _____ \$ _____ Change	\$ _____ -\$ _____ \$ _____ Change

Explore with Ms. Forrest

Email: rforrest@scdsb.on.ca

Social Studies Task

We are learning about the location of countries and oceans on a map.

Using your knowledge of cardinal directions, oceans, and countries, fill in the blanks using north, south, east, or west. You can use [Google Earth](#), or the map below to help you.

- The United States is _____ of Canada.
- If I am travelling from Russia to Canada, then I am going _____.
- The Indian Ocean is _____ of India.
- I travelled from Australia to South America, and then from South America to Italy. That means that first I travelled _____ and then I travelled _____.
- China is _____ of Russia but _____ of South Korea.



Have a “Thankful Thursday” everyone!

From: Mrs. Haidner

